




Name _____



12 Noon
Boston



San Francisco



London

If it is 12 noon in Boston, Massachusetts,
what time is it in the other two cities?
Draw in the hands of the clock and write in
the time. Use the space below for your math.